



UNIVERSITY OF CAMBRIDGE INTERNATIONAL EXAMINATIONS
International General Certificate of Secondary Education

CHEMISTRY

0620/01

Paper 1 Multiple Choice

October/November 2008

45 Minutes

Additional Materials: Multiple Choice Answer Sheet
 Soft clean eraser
 Soft pencil (type B or HB is recommended)



READ THESE INSTRUCTIONS FIRST

Write in soft pencil.

Do not use staples, paper clips, highlighters, glue or correction fluid.

Write your name, Centre number and candidate number on the Answer Sheet in the spaces provided unless this has been done for you.

There are **forty** questions on this paper. Answer **all** questions. For each question there are four possible answers **A, B, C** and **D**.

Choose the **one** you consider correct and record your choice in **soft pencil** on the separate Answer Sheet.

Read the instructions on the Answer Sheet very carefully.

Each correct answer will score one mark. A mark will not be deducted for a wrong answer.

Any rough working should be done in this booklet.

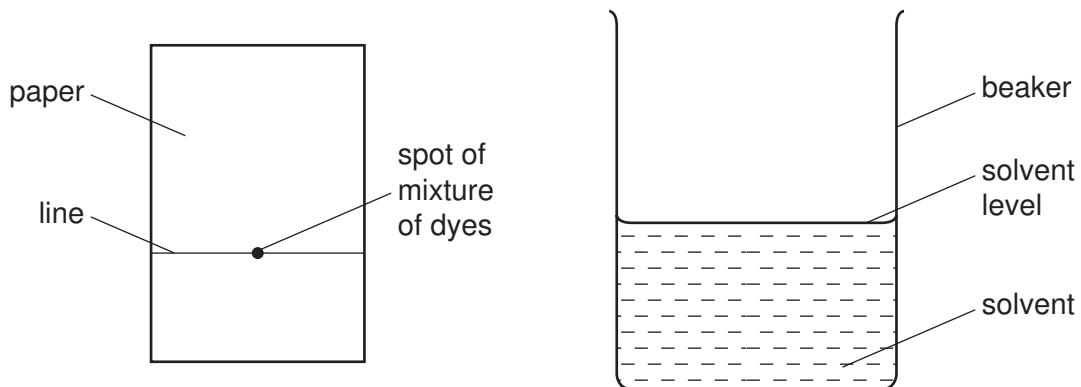
A copy of the Periodic Table is printed on page 16.

You may use a calculator.

This document consists of **15** printed pages and **1** blank page.



- 1 In which substance are the particles furthest apart at room temperature?
- A ethanol
B methane
C salt
D sugar
- 2 An experiment is carried out to separate a mixture of two dyes. A line is drawn on a piece of chromatography paper and a spot of the dye mixture placed on it. The paper is dipped into a solvent and left for several minutes.



Which statement about this experiment is correct?

- A The dyes must differ in their boiling points.
B The dyes must differ in their solubilities in the solvent.
C The line must be drawn in ink.
D The line must be placed below the level of the solvent.
- 3 An aqueous solution contains barium iodide.

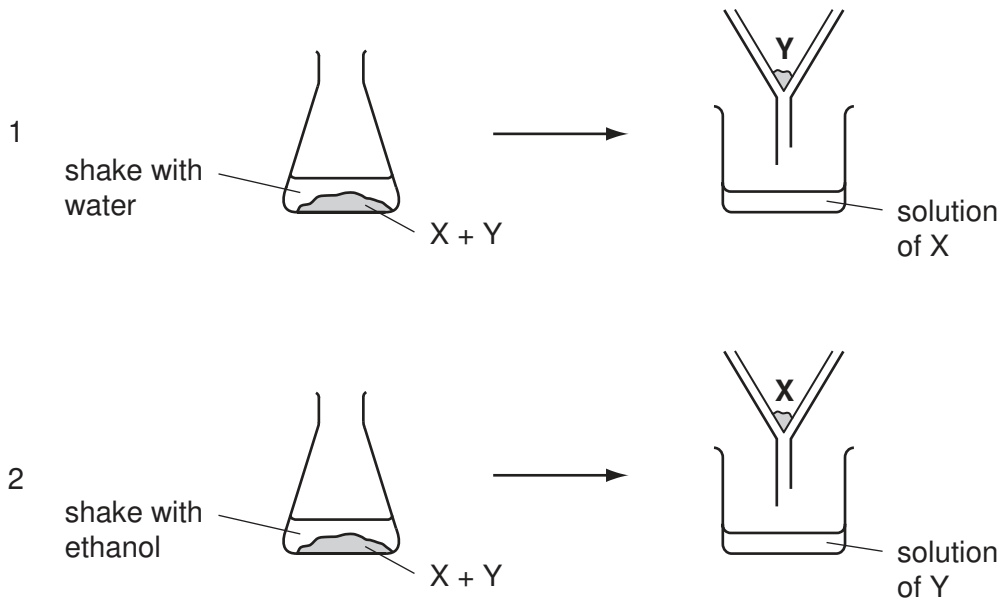
It is possible to obtain a solution that contains $\text{Ba}^{2+}(\text{aq})$ but no $\text{I}^{-}(\text{aq})$ by adding1..... until no more2..... precipitate forms.

Which words correctly complete gaps 1 and 2?

	1	2
A	aqueous lead(II) nitrate	white
B	aqueous lead(II) nitrate	yellow
C	dilute sulphuric acid	white
D	dilute sulphuric acid	yellow

- 4 A solid mixture contains an ionic salt, X, and a covalent organic compound, Y.

Two students suggested methods of separating the mixture as shown.



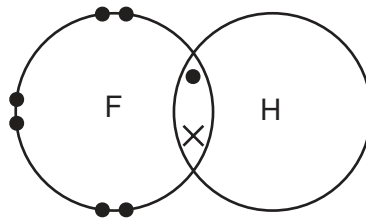
Which methods of separation are likely to work?

	1	2
A	✓	✓
B	✓	x
C	x	✓
D	x	x

- 5 What do the nuclei in hydrogen molecules contain?

- A** electrons and neutrons
- B** electrons and protons
- C** neutrons only
- D** protons only

- 9 The diagram shows a molecule of hydrogen fluoride.



In the molecule hydrogen fluoride, HF,

- A** the hydrogen and fluorine share a pair of electrons.
B the hydrogen and fluorine share a pair of protons.
C the hydrogen gives the fluorine an electron.
D the hydrogen gives fluorine a proton.
- 10 Lead(II) nitrate can be decomposed as shown.



Which numbers x, y and z balance the equation?

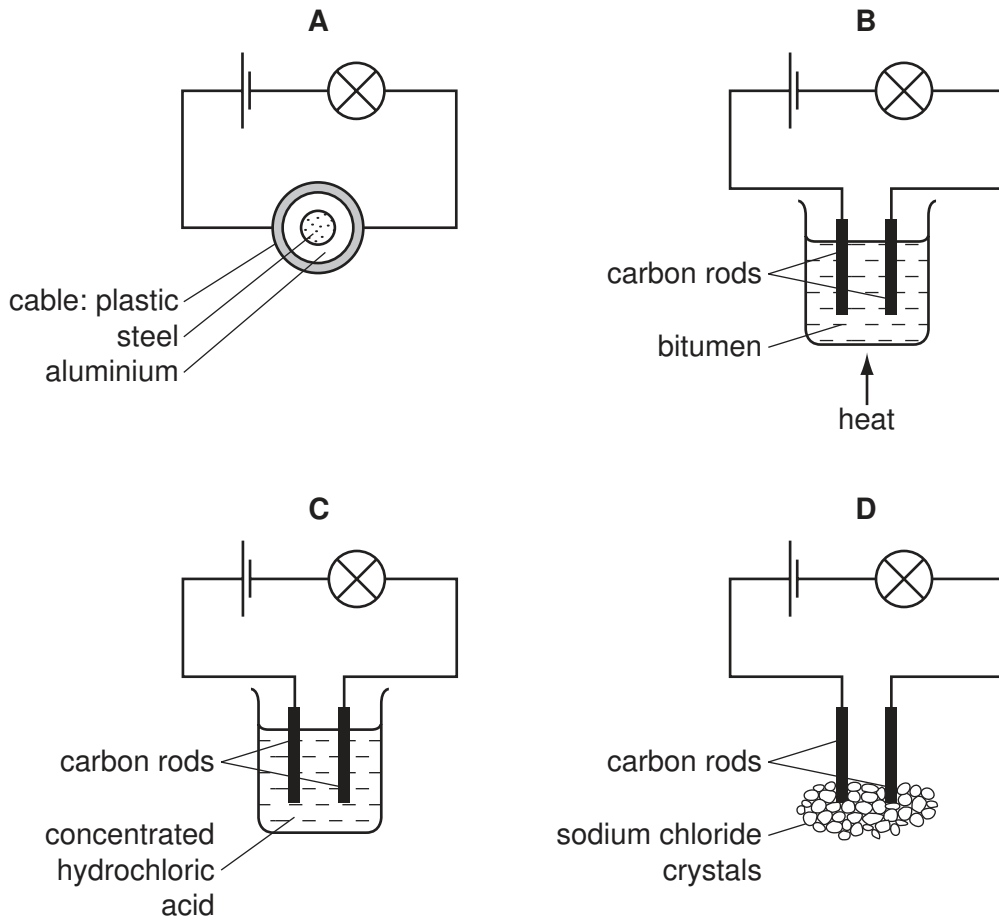
	x	y	z
A	2	2	2
B	2	2	4
C	2	4	4
D	4	4	2

- 11 Carbon and chlorine form a chloride.

What is the formula of this chloride?

- A** CCl_2 **B** CCl_4 **C** CaCl_2 **D** CaCl_4

12 Which diagram shows an experiment in which the bulb lights?



13 Metal X is low in the reactivity series and it is liberated by electrolysis of its bromide.

Metal X is1..... and the bromide is2..... .

Which words correctly complete gaps 1 and 2?

	1	2
A	lead	in solution
B	lead	molten
C	sodium	in solution
D	sodium	molten

- 14 Copper and hydrogen can each be formed by electrolysis.

At which electrodes are these elements formed?

	copper	hydrogen
A	anode	anode
B	anode	cathode
C	cathode	anode
D	cathode	cathode

- 15 When solid X is dissolved in water, an endothermic change takes place.

When 5 g of X are dissolved in 1000 cm³ of water, a temperature change of 10 °C occurs.

Which temperature change occurs when 5 g of X are dissolved in 500 cm³ of water?

- A** a decrease of 20 °C
B a decrease of 5 °C
C an increase of 20 °C
D an increase of 5 °C
- 16 The elements H₂ and ²³⁵U are both used as fuels.

In these processes, the reactions are1..... and2..... oxidised.

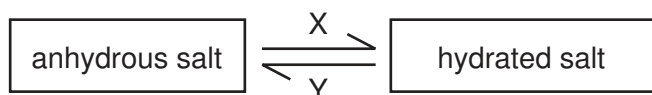
Which words correctly complete gaps 1 and 2?

	1	2
A	endothermic	both elements are
B	endothermic	only hydrogen is
C	exothermic	both elements are
D	exothermic	only hydrogen is

- 17 In which of the following reactions is the substance printed in **bold** oxidised?

- A** burning the **wax** in a candle
B dissolving **hydrogen chloride** in water
C making glucose from **carbon dioxide** and water by photosynthesis
D reacting **sodium hydroxide** with sulphuric acid

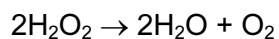
18 The diagram shows the change from a salt to its hydrated form.



Which labels can be used for X and Y?

	X	Y
A	+ heat	+ water
B	+ heat	– water
C	+ water	+ heat
D	+ water	– heat

19 Oxygen is formed when manganese(IV) oxide is added to hydrogen peroxide, H_2O_2 .



In this reaction, the manganese(IV) oxide acts as

- A** an acid.
- B** a base.
- C** a catalyst.
- D** a drying agent.

20 Dilute hydrochloric acid is added to aqueous barium nitrate in a test-tube.

What happens?

	the pH of the liquid in the test-tube	a precipitate forms
A	decreases	yes
B	decreases	no
C	increases	yes
D	increases	no

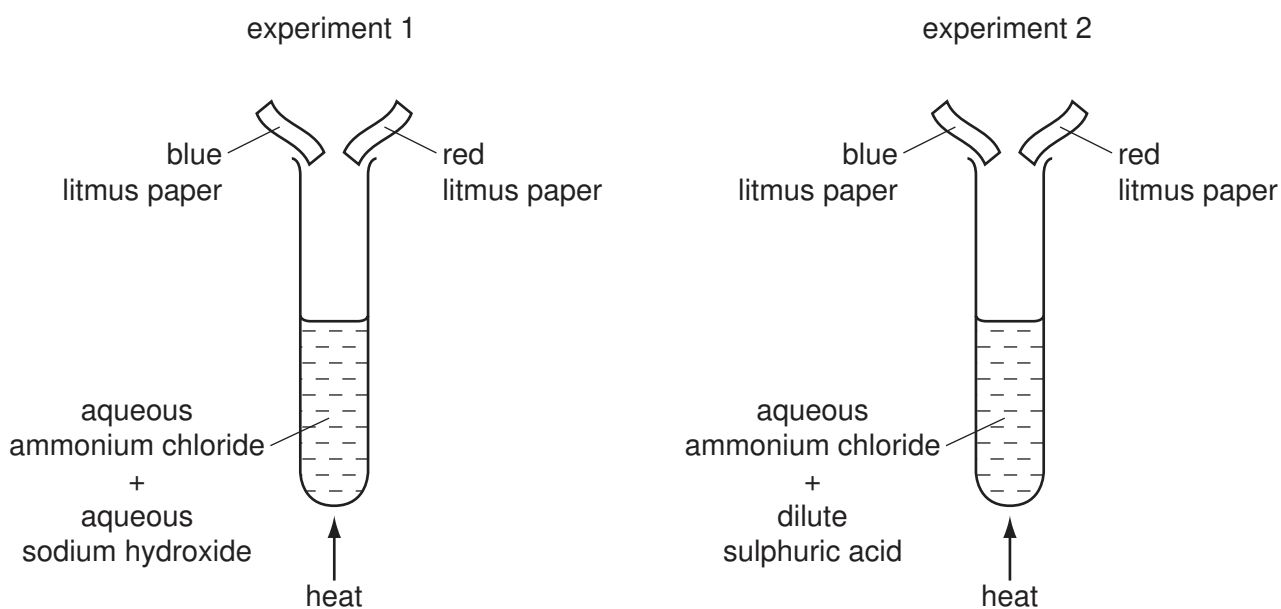
21 A colourless liquid in an unlabelled bottle is tested as shown.

- Litmus paper turns red.
- Magnesium ribbon fizzed.
- Reaction with aqueous barium nitrate produced a white precipitate.

What is the colourless liquid?

- A** aqueous sodium hydroxide
B aqueous sodium sulphate
C dilute hydrochloric acid
D dilute sulphuric acid

22 The diagrams show two experiments.



What happens to the pieces of litmus paper?

	experiment 1	experiment 2
A	blue → red	both pieces bleached
B	blue → red	no change
C	red → blue	both pieces bleached
D	red → blue	no change

23 Which substances react with dilute sulphuric acid to form a salt?

	magnesium	magnesium oxide	magnesium carbonate	magnesium chloride
A	✓	✓	✓	✗
B	✓	✓	✗	✓
C	✓	✗	✓	✓
D	✗	✓	✓	✓

24 Which properties of the element titanium, Ti, can be predicted from its position in the Periodic Table?

	can be used as a catalyst	conducts electricity when solid	has low density	forms coloured compounds
A	✗	✓	✓	✓
B	✓	✗	✓	✓
C	✓	✓	✗	✓
D	✓	✓	✓	✗

25 The table gives information about four elements.

Which element could be in Group I of the Periodic Table?

	proton number	reaction with water
A	even	reacts
B	even	no reaction
C	odd	reacts
D	odd	no reaction

26 What is the formula of a strontium ion?

- A** Sr^{2+} **B** Sr^+ **C** Sr^- **D** Sr^{2-}

- 27 Nichrome is an alloy of the two transition elements nickel and chromium. The alloy is used as the heating coil in electric fires and electric toasters.

Which properties of nichrome are important for these uses?

	high melting point	resistant to oxidation
A	✓	✓
B	✓	x
C	x	✓
D	x	x

- 28 Mild steel is an alloy of iron and carbon.

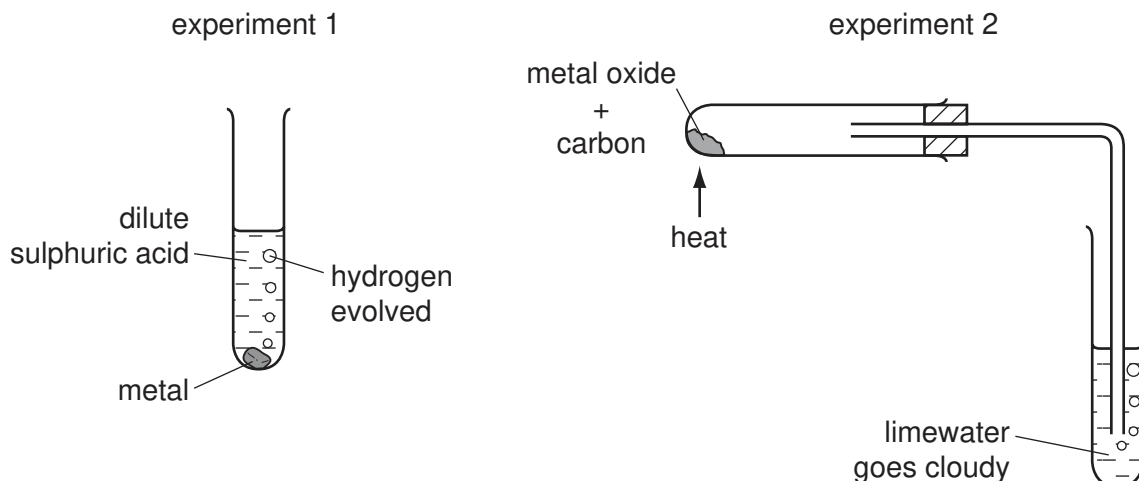
How does the carbon affect the properties of mild steel?

- A** The carbon makes the alloy a better conductor of electricity than iron.
- B** The carbon makes the alloy harder than the iron.
- C** The carbon makes the alloy softer than the iron.
- D** The carbon stops the iron rusting.
- 29 A new isotope of a divalent metal is discovered. Some students are asked to predict its properties.

Which student's predictions are correct?

student	number of electrons in outer shell	bonding in the oxide
A	2	covalent
B	2	ionic
C	6	covalent
D	6	ionic

30 The diagrams show two experiments to investigate metal reactivity.



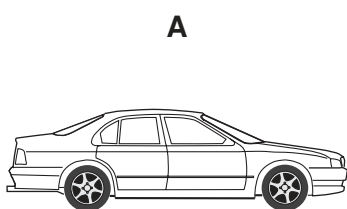
In which of these experiments could the metal be copper?

	experiment 1	experiment 2
A	✓	✓
B	✓	x
C	x	✓
D	x	x

31 Which reaction is **not** a step in the production of iron from hematite in the Blast Furnace?

- A** carbon (coke) burning in air to produce carbon dioxide
- B** carbon monoxide being formed from carbon and carbon dioxide
- C** iron oxide reacting with carbon monoxide to form iron
- D** iron reacting with limestone to produce slag

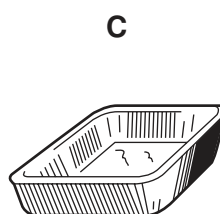
32 Which item is sometimes made from stainless steel?



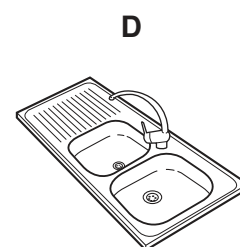
car body



drinks can



food container



kitchen sink

33 Some pollutant gases are present in the atmosphere because of the combustion of fossil fuels.

For which gases is this statement correct?

	CO	NO ₂	SO ₂
A	✓	✓	✓
B	✓	✓	x
C	✓	x	✓
D	x	✓	✓

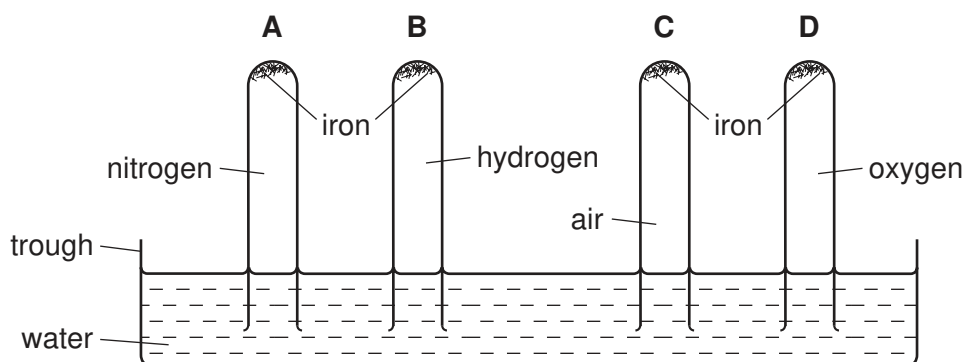
34 Air is a mixture of gases.

Which gas is present in the largest amount?

- A** argon
- B** carbon dioxide
- C** nitrogen
- D** oxygen

35 The experiment shown in the diagram was set up.

Which tube had the highest water level after one month?



36 An excess of fertiliser on a field can be dissolved by rain water and washed into streams and rivers. Fertiliser can then find its way into water supplies.

Which process at the water works, if any, would remove this fertiliser?

	filtration	chlorination
A	no	no
B	no	yes
C	yes	no
D	yes	yes

37 When added in turn to four solutions, aqueous sodium carbonate gives the following results.

Which solution is acidic?

solution	result
A	a blue precipitate forms
B	a white precipitate forms
C	bubbles of gas form
D	no visible reaction occurs

38 Which products are obtained by the cracking of an alkane?

	alkene	hydrogen	water
A	✓	✓	✓
B	✓	✓	x
C	✓	x	✓
D	x	✓	✓

39 A compound takes part in an addition reaction.

How does its name end?

- A**ane
- B**ene
- C**ol
- D**oic acid

40 When glucose is fermented, ethanol is formed together with

- A** carbon dioxide.
- B** ethene.
- C** methane.
- D** oxygen.

DATA SHEET
The Periodic Table of the Elements

		Group																																																																																						
		I	II	III	IV	V	VI	VII	VIII	IX	X	0																																																																												
		1 H Hydrogen 1																																																																																						
		4 He Helium 2																																																																																						
7	9	3	4	5	6	7	8	9	10	11	12	13	14	15	16	17	18	19	20																																																																					
Li Lithium	Be Beryllium	B Boron	C Carbon	N Nitrogen	O Oxygen	F Fluorine	Ne Neon	Na Sodium	Mg Magnesium	Al Aluminium	Si Silicon	P Phosphorus	S Sulphur	Cl Chlorine	Ar Argon	K Potassium	Ca Calcium	Sc Scandium	Ti Titanium	V Vanadium	Cr Chromium	Mn Manganese	Fe Iron	Co Cobalt	Ni Nickel	Cu Copper	Zn Zinc	Ga Gallium	Ge Germanium	As Arsenic	Se Selenium	Br Bromine	Kr Krypton																																																							
11	12	13	14	15	16	17	18	19	20	21	22	23	24	25	26	27	28	29	30	31	32	33	34	35	36	37	38	39	40	41	42	43	44	45	46	47	48	49	50	51	52	53	54																																													
Na Sodium	Mg Magnesium	Al Aluminium	Si Silicon	P Phosphorus	S Sulphur	Cl Chlorine	Ar Argon	K Potassium	Ca Calcium	Sc Scandium	Ti Titanium	V Vanadium	Cr Chromium	Mn Manganese	Fe Iron	Co Cobalt	Ni Nickel	Cu Copper	Zn Zinc	Ga Gallium	Ge Germanium	As Arsenic	Se Selenium	Br Bromine	Kr Krypton	Rb Rubidium	Sr Strontium	Y Yttrium	Zr Zirconium	Nb Niobium	Mo Molybdenum	Tc Technetium	Ru Ruthenium	Rh Rhodium	Pd Palladium	Ag Silver	Cd Cadmium	In Indium	Sn Tin	Sb Antimony	Te Tellurium	I Iodine	Xe Xenon																																													
41	42	43	44	45	46	47	48	49	50	51	52	53	54	55	56	57	58	59	60	61	62	63	64	65	66	67	68	69	70	71	72	73	74	75	76	77	78	79	80	81	82	83	84	85	86																																											
Rb Rubidium	Sr Strontium	Y Yttrium	Zr Zirconium	Nb Niobium	Mo Molybdenum	Tc Technetium	Ru Ruthenium	Rh Rhodium	Pd Palladium	Ag Silver	Cd Cadmium	In Indium	Sn Tin	Sb Antimony	Te Tellurium	I Iodine	Xe Xenon	Cs Caesium	Ba Barium	La Lanthanum	Ce Cerium	Pr Praseodymium	Nd Neodymium	Pm Promethium	Sm Samarium	Eu Europium	Gd Gadolinium	Tb Terbium	Dy Dysprosium	Ho Holmium	Er Erbium	Tm Thulium	Yb Ytterbium	Lu Lutetium	Hf Hafnium	Ta Tantalum	W Tungsten	Re Rhenium	Os Osmium	Ir Iridium	Pt Platinum	Au Gold	Hg Mercury	Tl Thallium	Pb Lead	Bi Bismuth	Po Polonium	At Astatine	Rn Radon																																							
87	88	89	90	91	92	93	94	95	96	97	98	99	100	101	102	103	104	105	106	107	108	109	110	111	112	113	114	115	116	117	118	119	120	121	122	123	124	125	126	127	128	129	130	131	132	133	134	135	136	137	138	139	140	141	142	143	144	145	146	147	148	149	150	151	152	153	154	155	156	157	158	159	160	161	162	163	164	165	166	167	168	169	170	171	172	173	174	175
Fr Francium	Ra Radium	Ac Actinium	Th Thorium	Pa Protactinium	U Uranium	Np Neptunium	Pu Plutonium	Am Americium	Cm Curium	Bk Berkelium	Cf Californium	Es Einsteinium	Fm Fermium	Md Mendelevium	No Nobelium	Lr Lawrencium	Ce Cerium	Pr Praseodymium	Nd Neodymium	Pm Promethium	Sm Samarium	Eu Europium	Gd Gadolinium	Tb Terbium	Dy Dysprosium	Ho Holmium	Er Erbium	Tm Thulium	Yb Ytterbium	Lu Lutetium	Hf Hafnium	Ta Tantalum	W Tungsten	Re Rhenium	Os Osmium	Ir Iridium	Pt Platinum	Au Gold	Hg Mercury	Tl Thallium	Pb Lead	Bi Bismuth	Po Polonium	At Astatine	Rn Radon																																											

*58-71 Lanthanoid series
†90-103 Actinoid series

a	X	a = relative atomic mass
b	X	X = atomic symbol
b	X	b = proton (atomic) number

The volume of one mole of any gas is 24 dm³ at room temperature and pressure (r.t.p.).

Permission to reproduce items where third-party owned material protected by copyright is included has been sought and cleared where possible. Every reasonable effort has been made by the publisher (UCLES) to trace copyright holders, but if any items requiring clearance have unwittingly been included, the publisher will be pleased to make amends at the earliest possible opportunity.

University of Cambridge International Examinations is part of the Cambridge Assessment Group. Cambridge Assessment is the brand name of University of Cambridge Local Examinations Syndicate (UCLES), which is itself a department of the University of Cambridge.